

Whole Number Addition and Subtraction Exam Questions



Q1.

(a) Work out $27 + 38$

.....

(1)

(b) Work out $202 - 75$

.....

(1)

Q2.

There are 150 people on a train.

At the first stop

10 people get off the train

25 people get on the train.

At the next stop

5 people get off the train

16 people get on the train.

(a) How many people are on the train now?

.....

(3)

The train has 240 seats.

80 of the seats are red.

(b) What fraction of the seats are red?

Give your fraction in its simplest form.

.....

(2)

(Total for Question is 5 marks)



Q3.

The diagram shows the distances by rail, in kilometres, between five towns.

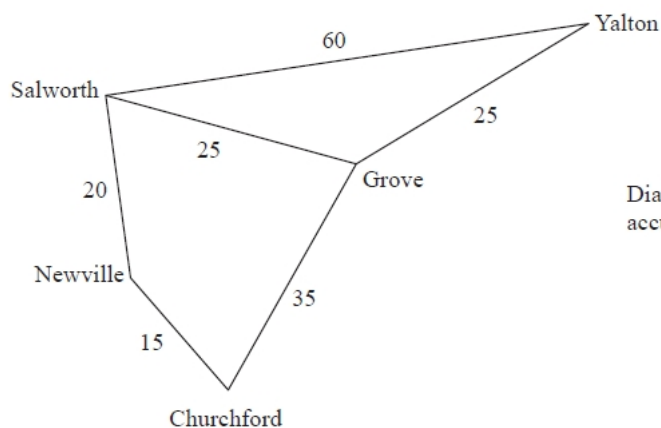


Diagram **NOT**
accurately drawn

Work out the shortest distance by rail between Neville and Yalton.

.....kilometres

(Total for question = 2 marks)

Q4.

The diagram shows the distances, in kilometres, between some towns, by road.

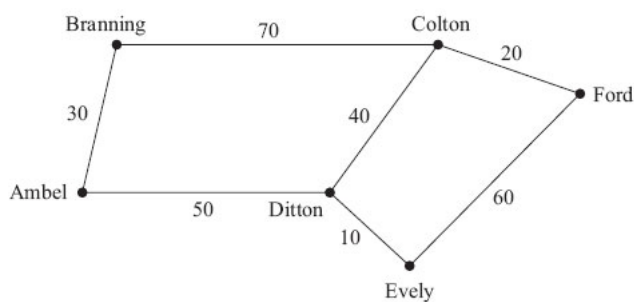


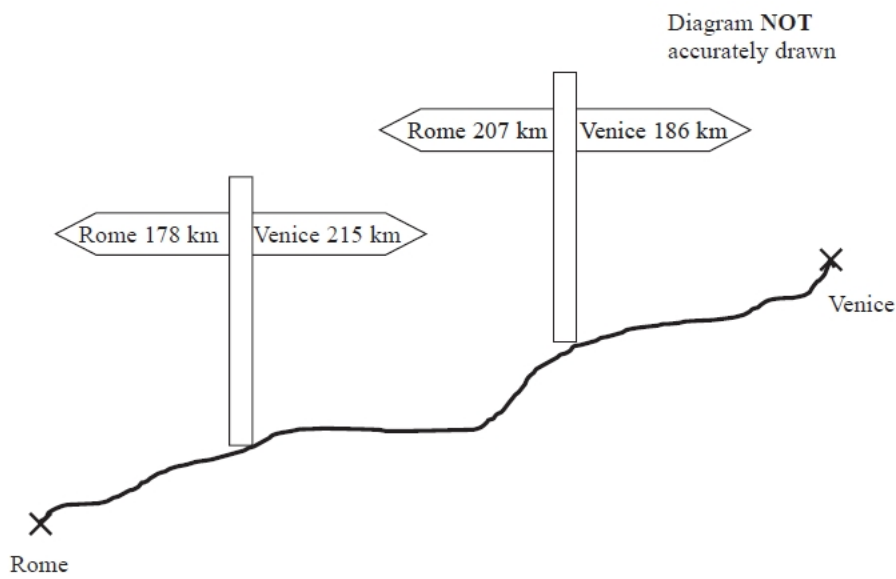
Diagram **NOT**
accurately drawn

Work out the shortest distance between Ambel and Ford by road.

.....

(Total for Question is 2 marks)

Q5.



The diagram shows two signs at the side of a road.
The road goes between Rome and Venice.

(a) Work out the distance along the road between Rome and Venice.

..... km
(2)

(b) Work out the distance along the road between the two signs.

..... km
(2)

(Total for question = 4 marks)